


Finding half of a number

To find half we need to share between two groups. Both groups need to be equal.

We need to split the whole into two equal parts



- 1 a) Salma gives half of her apples to each horse.
How many apples does each horse get?

There are 8 apples in Salma's bag.

I will share the whole bag of 8 apples into 2 equal parts.

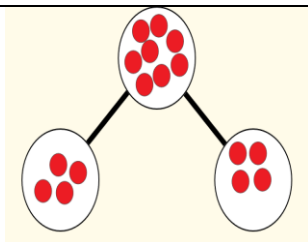


Take 2 apples.

Give 1 apple to each horse.



Keep going until all the apples have been shared.



The whole of 8 has been split into 2 equal parts.

Half of 8 is 4.

Can you share 8 objects with your favourite toy?

How many do you get each?

Task 1 (should do)

1 A group of children splits into two halves.

How many in each half?



Half of 8 children is children.




Half of children is children.

2 Colour half of each group.



Task 2 (can do)

Which groups of apples have been shared into halves?



Task 3 (could do)


3 Complete the sentences.

a)



Half of 10 apples is apples.

b)



Half of _____ is _____.